



# Regions of Canada

22

Due Friday

## Monday

1. How many provinces and territories make up Canada?

\_\_\_\_\_

2. Name the three territories of Canada.

\_\_\_\_\_

\_\_\_\_\_

## Tuesday

1. Name the provinces that border the Atlantic Ocean.

\_\_\_\_\_

\_\_\_\_\_

2. Which province(s) share the Great Lakes as a border with the U.S.?

\_\_\_\_\_

## Wednesday

1. Which territory has the most islands? The islands are located in which oceans?

\_\_\_\_\_

\_\_\_\_\_

2. Name the largest province and smallest province in terms of land area.

\_\_\_\_\_

\_\_\_\_\_



# Regions of Canada

## Thursday

1. Which territory and which province border the state of Alaska?

\_\_\_\_\_

2. How many provinces border the U.S.?

\_\_\_\_\_

## Friday

1. What is Canada's national capital? It is located on the border of which province?

\_\_\_\_\_

2. The islands off the northwestern coast of British Columbia belong to the state of Alaska. How is that shown on the map?

\_\_\_\_\_



## Challenge

Match the following capitals with the correct provinces and territories. Then cut out the quiz and attach it to the back of the map. Use a political map of Canada for help. The first one has been done for you.

### Provinces and Territories

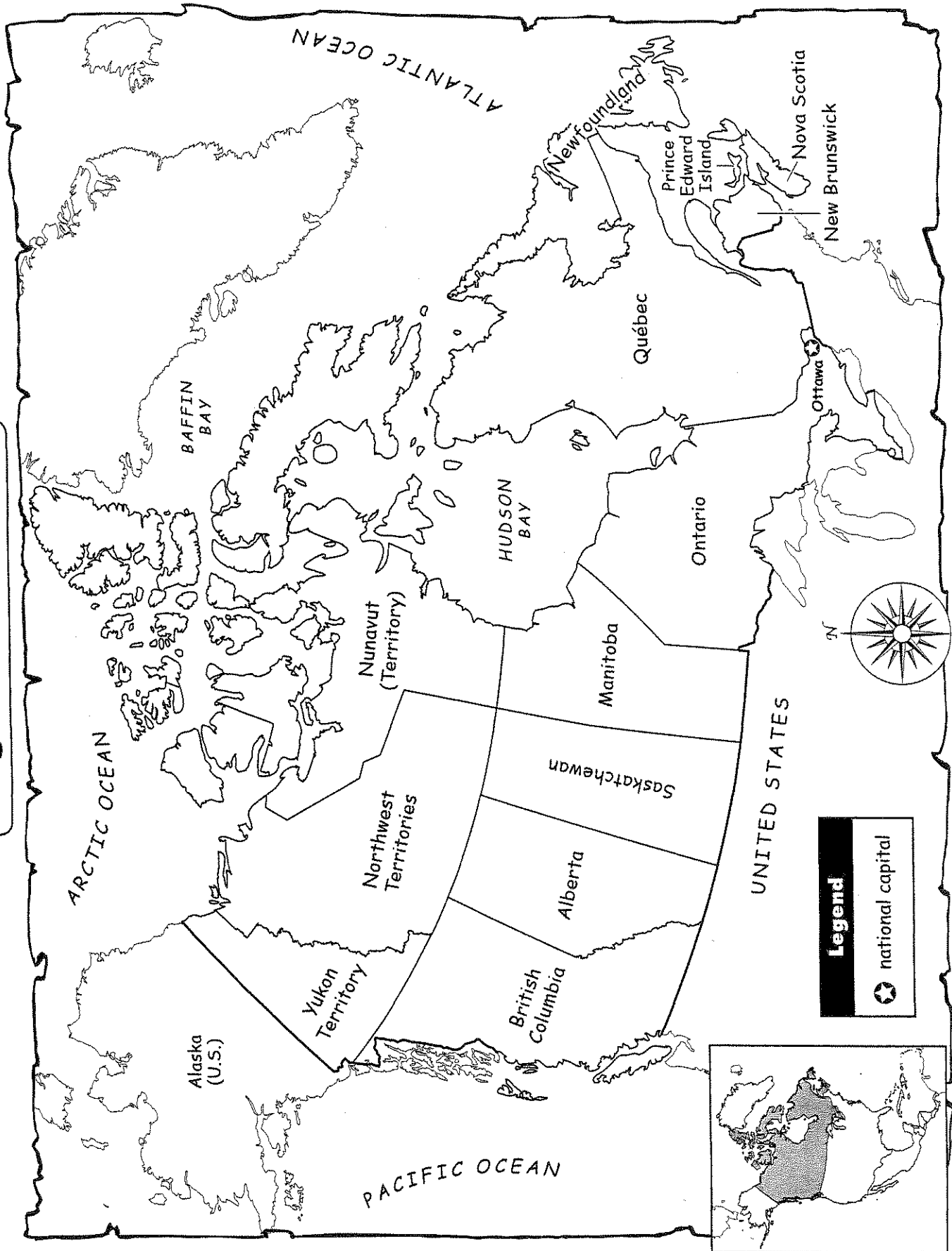
- e   1. Alberta
- \_\_\_\_\_ 2. British Columbia
- \_\_\_\_\_ 3. Manitoba
- \_\_\_\_\_ 4. New Brunswick
- \_\_\_\_\_ 5. Newfoundland
- \_\_\_\_\_ 6. Northwest Territories
- \_\_\_\_\_ 7. Nova Scotia
- \_\_\_\_\_ 8. Nunavut
- \_\_\_\_\_ 9. Ontario
- \_\_\_\_\_ 10. Prince Edward Island
- \_\_\_\_\_ 11. Québec
- \_\_\_\_\_ 12. Saskatchewan
- \_\_\_\_\_ 13. Yukon Territory

### Capitals

- a. Whitehorse
- b. St. John's
- c. Québec
- d. Charlottetown
- e. Edmonton
- f. Winnipeg
- g. Halifax
- h. Iqaluit
- i. Yellowknife
- j. Fredericton
- k. Toronto
- l. Regina
- m. Victoria

# Regions of Canada

Name \_\_\_\_\_





# The Region of Central America

Due Friday 11

## Monday

1. How many countries make up the region of Central America? Name two of them.

---

---

2. Is Central America part of the continent of North America or South America?

---

## Tuesday

1. Central America connects the southern part of North America to which continent?

---

2. Which waterways border Central America?

---

---

## Wednesday

1. Which country borders Central America to the north?

---

2. Which South American country borders Central America to the south?

---



# The Region of Central America

## Thursday

1. Name the country whose capital is closest to Mexico.

\_\_\_\_\_

2. Central America is a narrow bridge of land. What is another name for this kind of landform?

\_\_\_\_\_

## Friday

1. Which country does not border the Caribbean Sea?

\_\_\_\_\_

2. Which narrow country curves from the west to the east? Name its borders.

\_\_\_\_\_

\_\_\_\_\_

\_\_\_\_\_

## Challenge

The Panama Canal is a waterway that cuts across the Isthmus of Panama. It links the Atlantic Ocean and the Pacific Ocean. The canal helps ships travel between Atlantic and Pacific ports without sailing around South America.

On the map, label the Panama Canal. Use an atlas or other resource to help you with its location.



The countries of Central America form a long isthmus between the rest of North America and the continent of South America.



# Regions of the United Kingdom

Monday

*Due Friday*

1. The country of the United Kingdom is made up of four regions. Name them.

---

---

2. In which continent does the United Kingdom belong?

---

Tuesday

1. The United Kingdom is between which ocean and which sea?

---

2. What is the national capital of the United Kingdom?

---

Wednesday

1. Which of the four political divisions does not share the same island as the others?

---

2. What is the name of the group of islands in which the United Kingdom belongs?

---



# Regions of the United Kingdom

## Thursday

1. Which United Kingdom regions make up the island of Great Britain?

---

---

2. Which independent country shares an island with one of the regions of the United Kingdom?

---

## Friday

1. If a person sails from southern England to Belgium, which body of water does he or she travel through?

---

2. Name four labeled countries that share the North Sea or the English Channel with the United Kingdom.

---

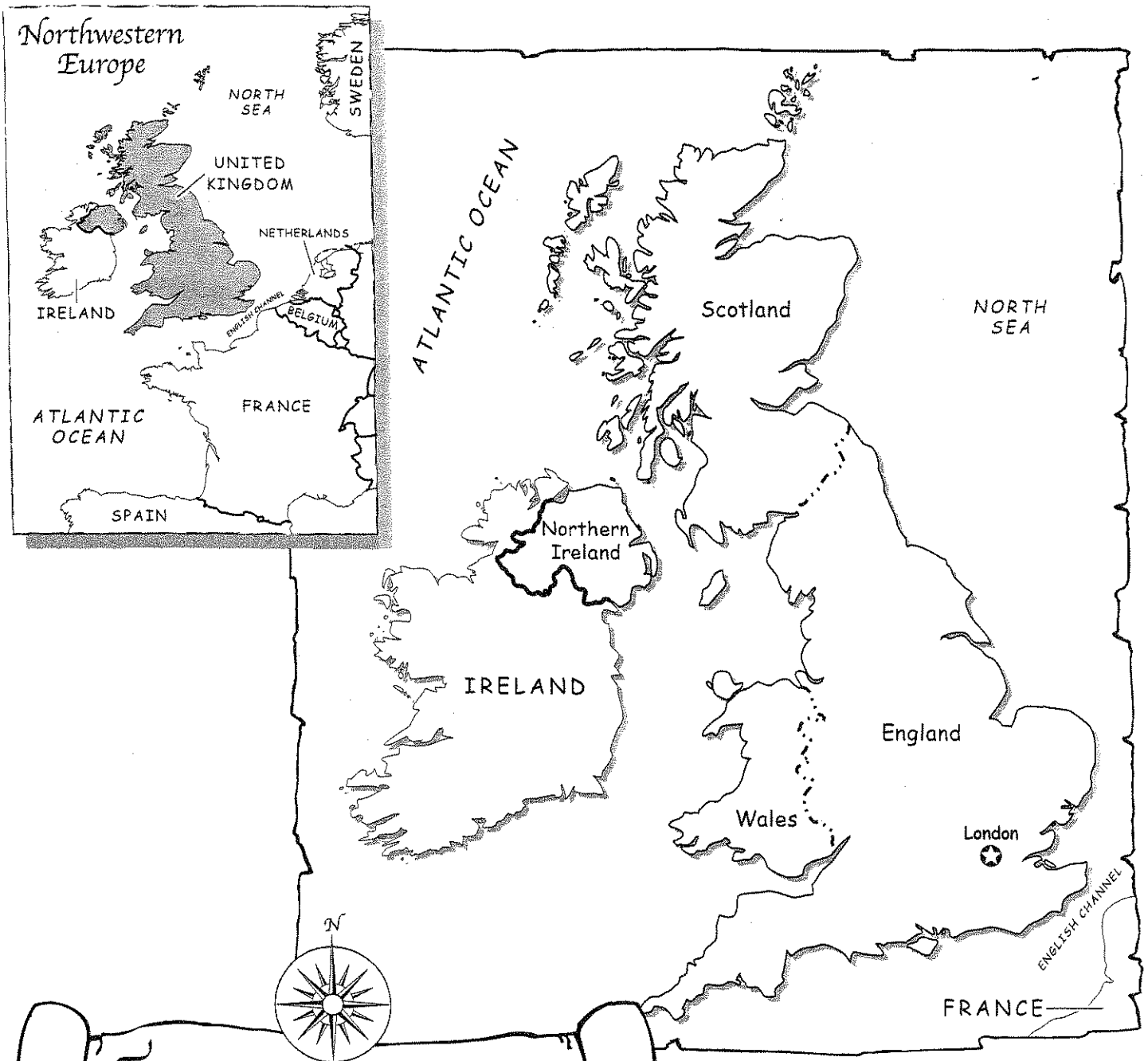
---

## Challenge

London is the national capital of the United Kingdom. It is located in England. Please label on the map the other capitals of the regions of the United Kingdom. Use an atlas or other resource to help you with the names and the locations.



# Regions of the United Kingdom



The United Kingdom covers most of an island group called the British Isles. The two largest islands are called Great Britain and Ireland. The island of Great Britain includes England, Scotland, and Wales. Northern Ireland is on the northeastern part of the island of Ireland.

## Legend



national capital



international border



political division border



# A National Symbol: Washington, D.C.

12

## Monday

1. Washington, D.C., is the national capital of the United States. What do the initials *D.C.* stand for?

\_\_\_\_\_

2. Washington, D.C., is located between which two states?

\_\_\_\_\_

## Tuesday

1. The president of the U.S. lives and works in which building? In which labeled section of the map is this building?

\_\_\_\_\_

2. The Smithsonian Institution is the headquarters for many museums. Where on the map is it located?

\_\_\_\_\_

\_\_\_\_\_

## Wednesday

1. The National Mall is a park-like area. Which two buildings act as the northeast and southwest borders for the Mall?

\_\_\_\_\_

2. The Hirshhorn Museum is an art gallery. Which other labeled art museum is located on the National Mall?

\_\_\_\_\_



# A National Symbol: Washington, D.C.

## Thursday

1. Which labeled memorial honors war veterans?

\_\_\_\_\_

2. Capitol Hill rises 88 feet (27 m). Which three important labeled government buildings stand on the hill?

\_\_\_\_\_  
\_\_\_\_\_

## Friday

1. Name two labeled memorials that honor a famous person. Why are these people being honored?

\_\_\_\_\_  
\_\_\_\_\_  
\_\_\_\_\_

2. Which of the Smithsonian museums would exhibit famous historic flights?

\_\_\_\_\_  
\_\_\_\_\_

## Challenge

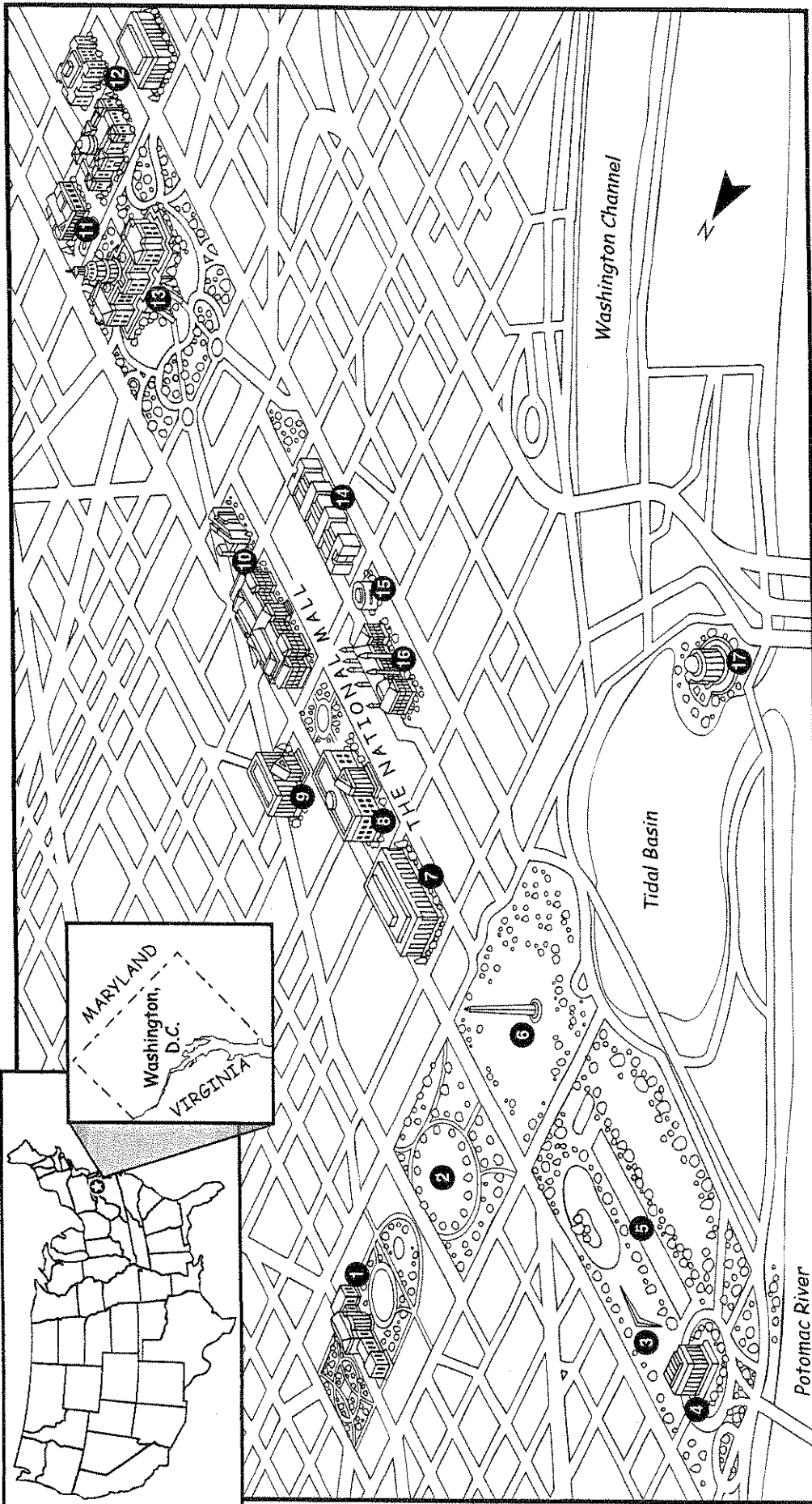
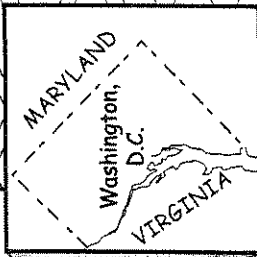
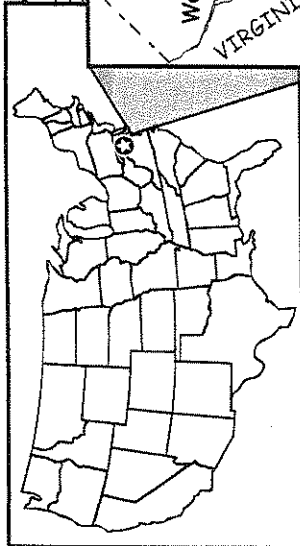
*1/2*

Washington, D.C., is called a symbol for the country. Why? Write your answer on the back of the map.

Name \_\_\_\_\_

WEEK 23

# A National Symbol: Washington, D.C.



- |                              |  |                                   |
|------------------------------|--|-----------------------------------|
| 1. White House               | 7. National Museum of American History | 13. U.S. Capitol                  |
| 2. The Ellipse               | 8. National Museum of Natural History  | 14. National Air and Space Museum |
| 3. Vietnam Veterans Memorial | 9. National Archives                   | 15. Hirshhorn Museum              |
| 4. Lincoln Memorial          | 10. National Gallery of Art            | 16. Smithsonian Institution       |
| 5. Reflecting Pool           | 11. Supreme Court                      | 17. Jefferson Memorial            |
| 6. Washington Monument       | 12. Library of Congress                |                                   |



# A Cultural Landmark: Yellowstone National Park

## Monday

1. Yellowstone National Park is located in which three states? The park is mostly in which of these three states?

\_\_\_\_\_

2. How many entrances are there to the park? Which entrance is closest to Old Faithful?

\_\_\_\_\_

## Tuesday

1. Which labeled river flows through the national park?

\_\_\_\_\_

2. Name the labeled lakes in Yellowstone National Park. Which lake is the largest?

\_\_\_\_\_

\_\_\_\_\_

\_\_\_\_\_

## Wednesday

1. Which point of interest is closest to the North Entrance to the park?

\_\_\_\_\_

2. Inspiration Point is between which two labeled features?

\_\_\_\_\_

# A Cultural Landmark: Yellowstone National Park

## Thursday

1. What is the name and elevation of the highest point in Yellowstone National Park?

---

2. What is the most famous geyser in the park? How often does it erupt?

---

## Friday

1. Where is the hottest area in the national park? How hot can the water reach in this area?

---

---

2. Where are the two large waterfalls located?

---

---

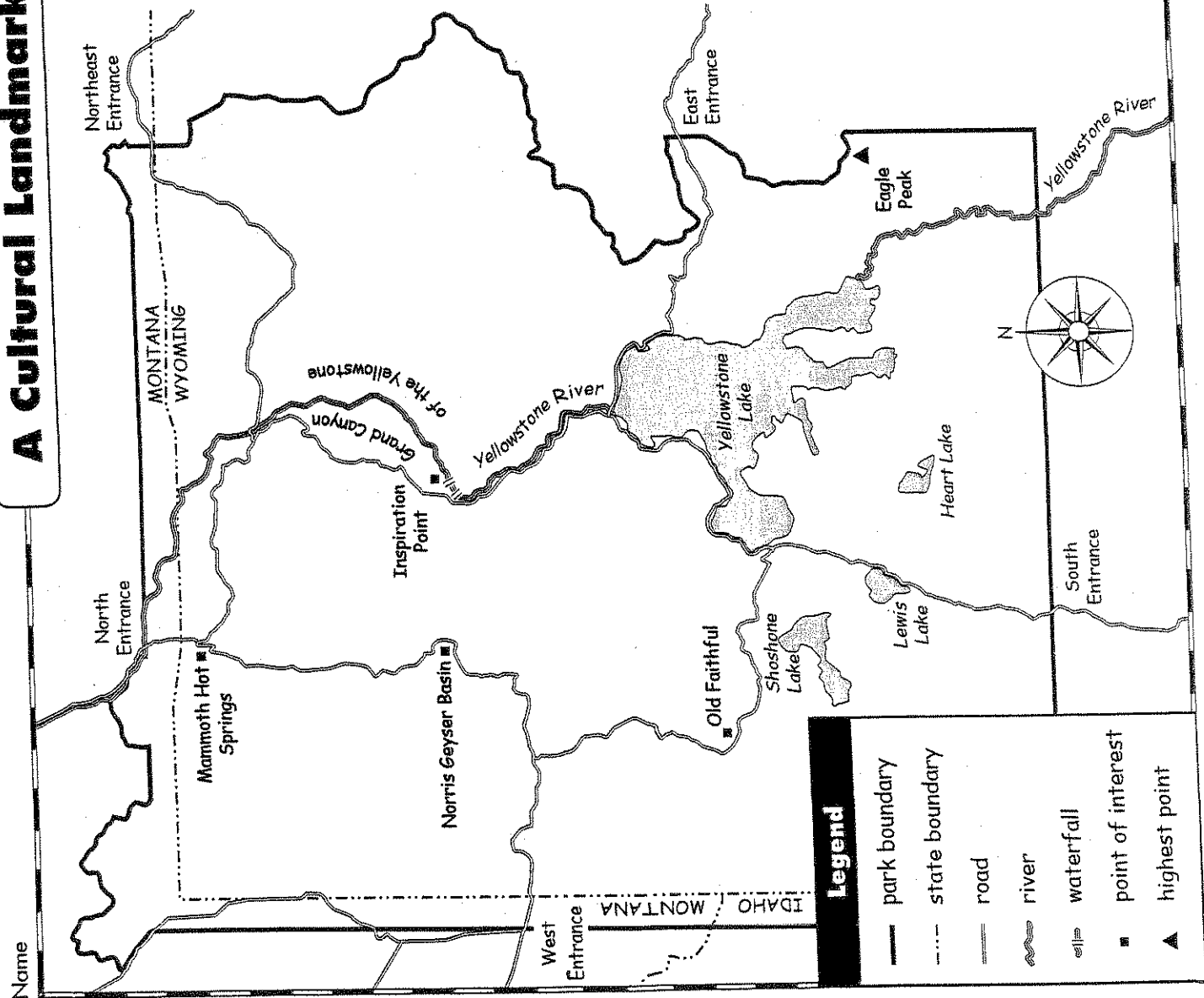
## Challenge

Yellowstone National Park is considered a national symbol, a cultural landmark, and a national treasure. On the back of the map, write a paragraph telling people why Yellowstone National Park should be preserved and protected.

# A Cultural Landmark

## Yellowstone National Park

- Eagle Peak, at 11,358 feet (3,462 m) is the highest point in the park.
- The park has more than 200 active geysers.
- The most famous geyser is Old Faithful, which erupts about every 76 minutes.
- Norris Geyser Basin has hundreds of geysers and hot springs. It is the hottest area in the park. The temperature of the water reaches more than 400°F (200°C) in some places.
- The Grand Canyon of Yellowstone is over 5,000 feet (1,524 m) deep in some places.
- The Yellowstone River cuts through the Grand Canyon, creating two large waterfalls.
- Yellowstone Lake is 20 miles (32 km) long and 14 miles (23 km) wide.



Name

### Legend

- park boundary
- - - state boundary
- == road
- ~ river
- ||| waterfall
- point of interest
- ▲ highest point



# Climate Zones of the United States

12

Due Friday

## Monday

1. How many different kinds of climate zones are shown on the map?

\_\_\_\_\_

2. Which two climate zones are the direct opposites—one is always warm and one is always cold?

\_\_\_\_\_

## Tuesday

1. Which states include tropical climates? Which part of each state includes the tropical climate zone?

\_\_\_\_\_

\_\_\_\_\_

2. Alaska is unique. It includes two climate zones that are not found in any other state. What are they?

\_\_\_\_\_

## Wednesday

1. The states that border the Great Lakes are in which climate zone? Name at least three of those states.

\_\_\_\_\_

\_\_\_\_\_

2. In which climate zone does almost all of the Southeast region belong?

\_\_\_\_\_





# Climate Zones of the United States

## Thursday

1. Which state has five climate zones? Name them.

---

---

2. Name three different amounts of precipitation the Northwest could have over time.

---

## Friday

1. Which climate zone has more rain throughout the year—marine or semiarid? Name two states that have this climate zone.

---

2. Which climate zone is the driest of the ten shown on the map? Name three states that are in this climate zone.

---

---

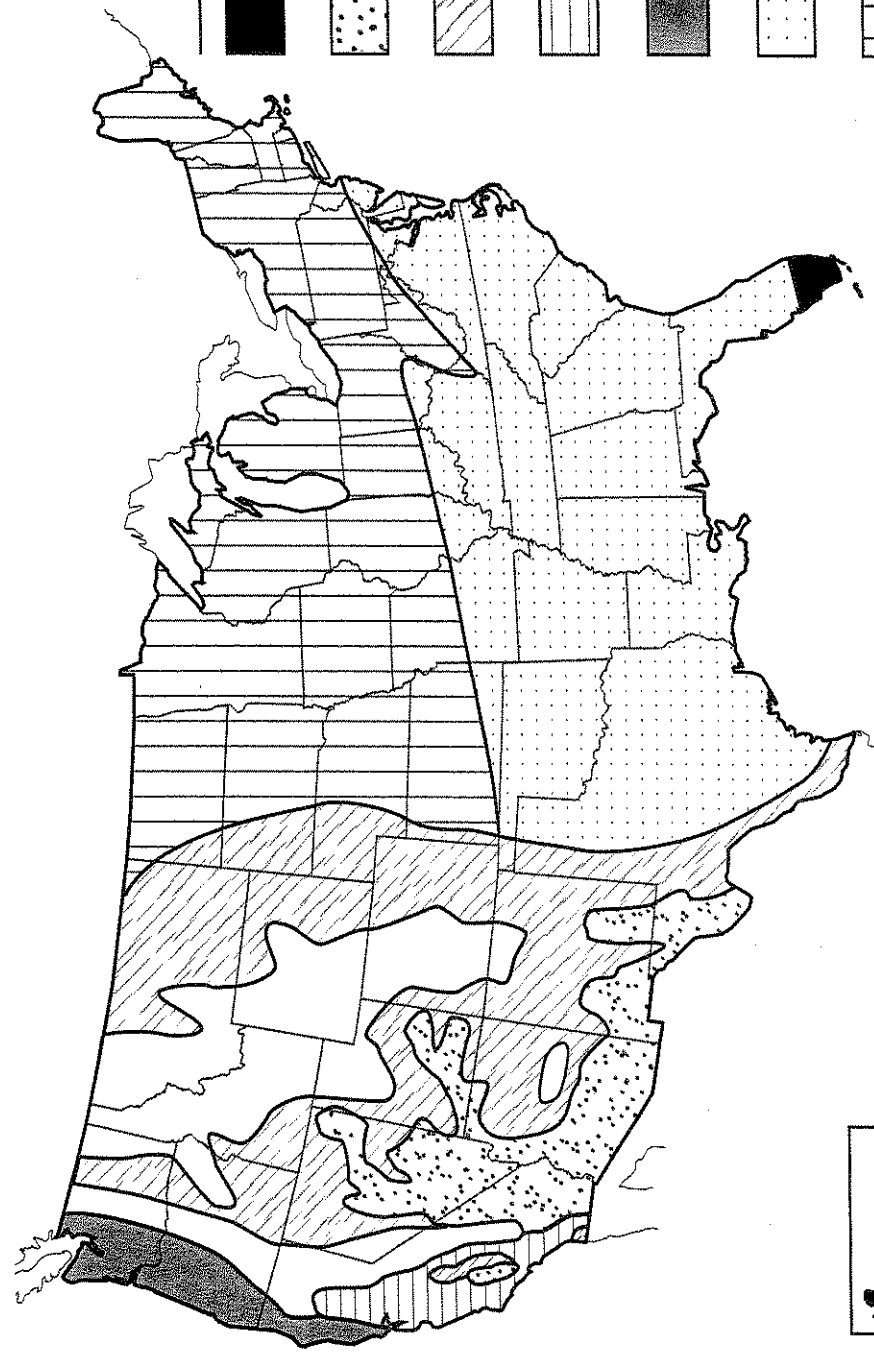
## Challenge

12











Color your state on the map page. Write a caption for the map, explaining about the climate zone or zones in your state.

# Climate Zones of the United States

Name \_\_\_\_\_



## Legend

-  **Tropical**—Warm throughout the year; light to heavy precipitation.
-  **Desert**—Dry; temperature varies with latitude and altitude
-  **Semiarid**—Temperature varies with latitude and altitude; light precipitation
-  **Mediterranean**—Hot, dry summers; mild winters with moderate precipitation
-  **Marine**—Warm summers; cool winters; moderate precipitation
-  **Humid subtropical**—Hot summers; cool winters; moderate precipitation
-  **Continental moist**—Mild summers; cold winters; moderate precipitation
-  **Highland**—Temperatures and precipitation vary with altitude
-  **Subarctic**—Cold winters; cool summers; precipitation in summer
-  **Tundra**—Always cold; little precipitation

