



# A Physical Map: Canada

18  
Due Friday

## Monday

1. Name the oceans that border Canada.

---

---

2. Which two large bays are labeled on the map of Canada?

---

## Tuesday

1. Which lakes and river share a border with Canada and the U.S.?

---

---

2. Which part of Canada is very mountainous? Name the mountain ranges.

---

---

## Wednesday

1. What is the name of the highest peak in Canada, and what is its elevation?

---

2. The Mackenzie River flows from which body of water into which other body of water?

---

---



# A Physical Map: Canada

## Thursday

1. If a person sails from the Arctic Ocean to the Labrador Peninsula, which bodies of water does he or she cross?

---

---

2. What is a *strait*? Name two straits that are labeled on the map.

---

---

---

## Friday

1. The Canadian Shield was formed by ancient rock. This region curves around which body of water?

---

2. Arctic plains, called tundra, cover the northern parts of which two land regions?

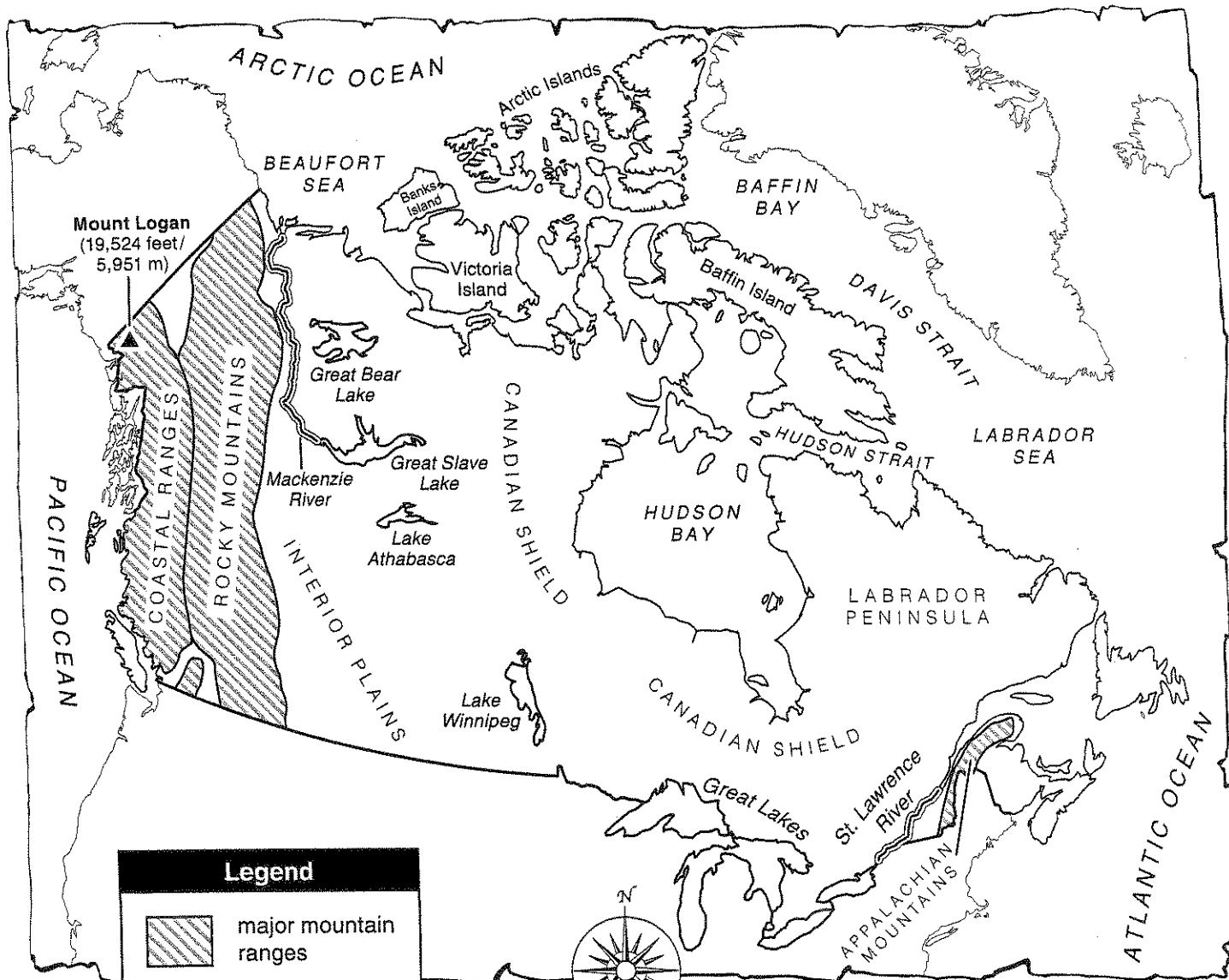
---




---

**Challenge** *1/8 You must do the challenge to pass!*

Label the following places on the map: Alaska, Greenland, and the United States. Also, label each of the names of the Great Lakes. Use a reference physical map to help you.

# A Physical Map: Canada



Legend	
	major mountain ranges
	major river
	highest peak

**T**he Canadian Shield and the Interior Plains are the largest land regions of Canada. The southern part of the Canadian Shield is thick with forests, and the northern part is tundra. The southern part of the Interior Plains is mostly grasslands, and the northern part is tundra. The tundra is an arctic plain that remains frozen except for the ground just at the surface. Mosses and small shrubs are the only kinds of plants that grow there.





# A Physical Map: Mexico

16

**Monday**

*Due Friday*

1. Name four kinds of physical features that are included on the map of Mexico.

---

---

2. Name two large peninsulas in Mexico.

---

---

**Tuesday**

1. Which mountain range is located east of the Central Plateau?

---

2. Which mountain range covers the most area in Mexico?

---

**Wednesday**

1. Name the large gulf that borders Mexico and the United States.

---

2. Which desert borders Mexico and the United States on the Rio Grande?

---



# A Physical Map: Mexico

## Thursday

1. Name the labeled international borders of Mexico.

\_\_\_\_\_

2. Mountains and plateaus cover two-thirds of Mexico. Which landforms cover the rest of the country?

\_\_\_\_\_

## Friday

1. Rainforests cover parts of the Yucatán Peninsula. Which peninsula is covered by a much drier landscape?

\_\_\_\_\_

2. What is the highest peak in Mexico and what is its elevation?

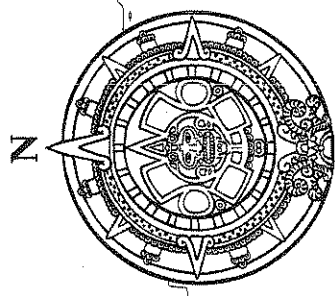
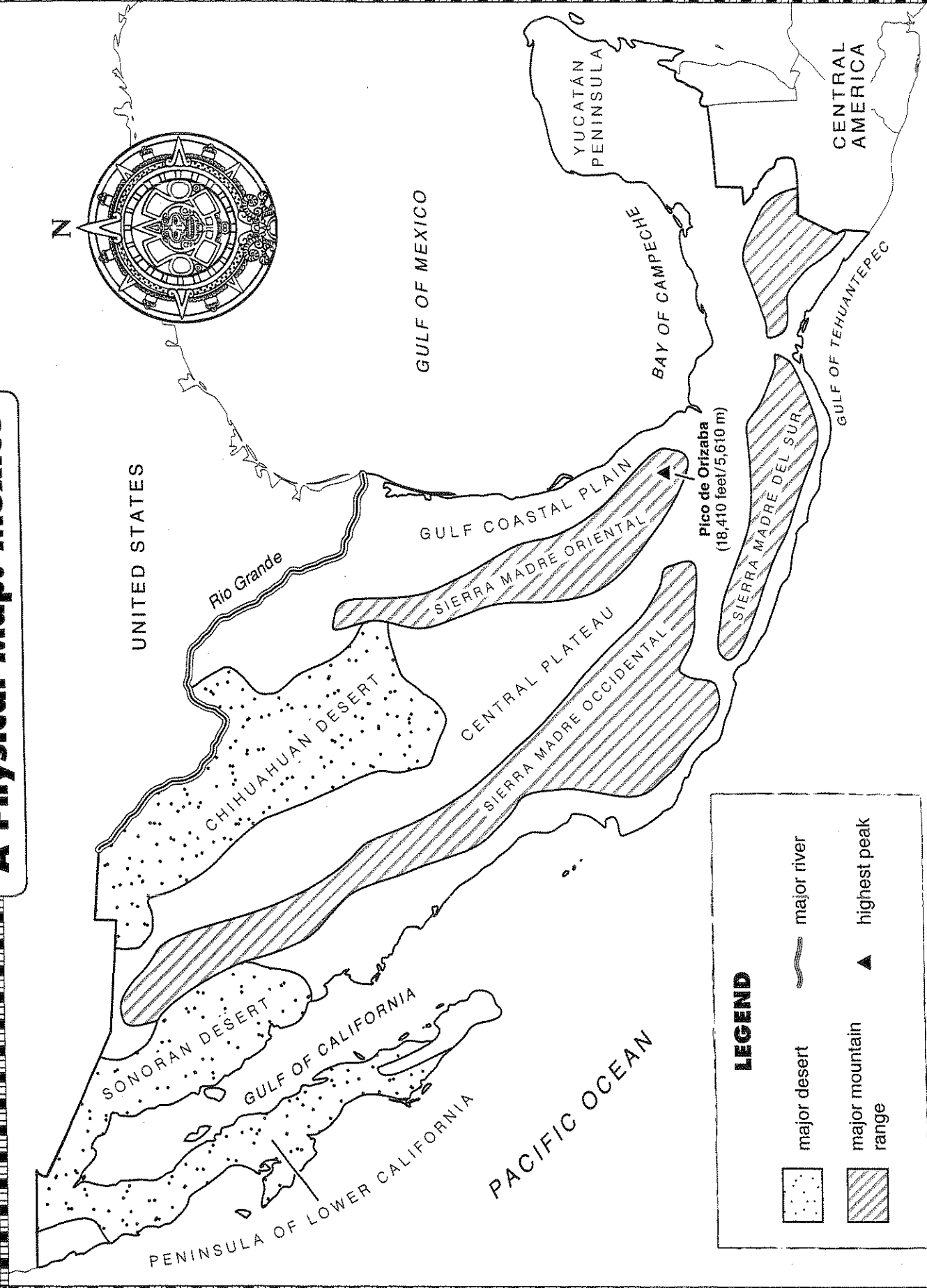
\_\_\_\_\_

## Challenge





On the map, label the following borders in the correct positions. On the United States border, label Arizona, California, New Mexico, and Texas. In Central America, label the countries of Belize and Guatemala. Use a reference map or atlas to help you.

# A Physical Map: Mexico

Name \_\_\_\_\_



**LEGEND**

	major desert		major river
	major mountain range		highest peak



# A Physical Map: South America

## Monday

1. What is the name of the long mountain range in South America?  
\_\_\_\_\_
2. How many rivers are labeled on the map? Which river is the longest?  
\_\_\_\_\_

## Tuesday

1. What is the name of the highest mountain? What is its elevation?  
\_\_\_\_\_
2. Which oceans and sea border the continent of South America?  
\_\_\_\_\_  
\_\_\_\_\_

## Wednesday

1. Is Patagonia a desert, a grassland, or rainforest area?  
\_\_\_\_\_
2. Which two labeled areas are covered with grasslands?  
\_\_\_\_\_



# A Physical Map: South America

## Thursday

1. The Tierra del Fuego is a group of islands in South America. What is another name for a group of islands?

\_\_\_\_\_

2. Where are the Galápagos Islands located?

\_\_\_\_\_

## Friday

1. If a person sailed from the Falkland Islands to the Galápagos Islands, which two ways could he or she travel?

\_\_\_\_\_  
\_\_\_\_\_  
\_\_\_\_\_

2. What is the Gran Chaco? Where is it located in South America?

\_\_\_\_\_  
\_\_\_\_\_

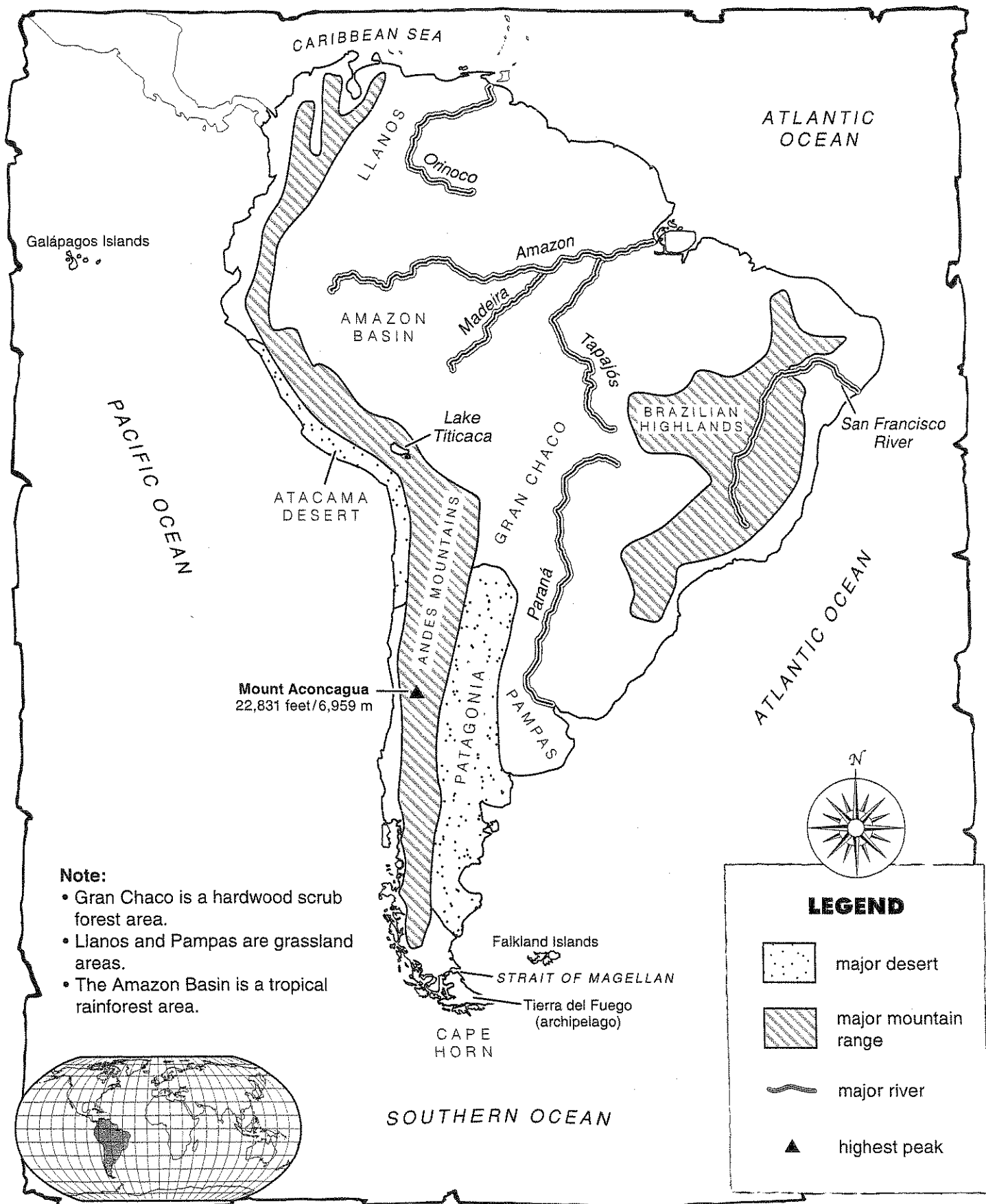
**Challenge:** *You must do this to pass!*  $\frac{1}{5}$

The Amazon Rainforest covers almost two million square miles (5.2 mil. sq. km) in the Amazon River Basin. About two-thirds of the rainforest lies in Brazil. The rainforest also lies in parts of Bolivia, Peru, Ecuador, Colombia, and Venezuela.

Shade in the Amazon Rainforest area on the map of South America. Use a reference physical map or other resource to help you.







# A Physical Map: South America



- Note:**
- Gran Chaco is a hardwood scrub forest area.
  - Llanos and Pampas are grassland areas.
  - The Amazon Basin is a tropical rainforest area.

**LEGEND**

-  major desert
-  major mountain range
-  major river
-  highest peak