



A Road Map: Montana

13 Due Friday!

Monday

1. There are two major kinds of roads on the map. What are they called?

2. Name the two highways that run in a north-south direction through Montana.

Tuesday

3. Name the two interstate highways that run mostly in an east-west direction through the state.

4. If a person were to travel from Missoula to Billings, which interstate highway would he or she take?

Wednesday

5. What does the term *highway interchange* mean?

6. Find the capital of Montana. It is located at the interchange of which two highways?



A Road Map: Montana

Thursday

7. Name all the labeled cities on Interstate 90.

8. Is Missoula closer to Hamilton, Helena, or Kalispell?

Friday

9. What happens to Interstate 15 between Great Falls and Helena?

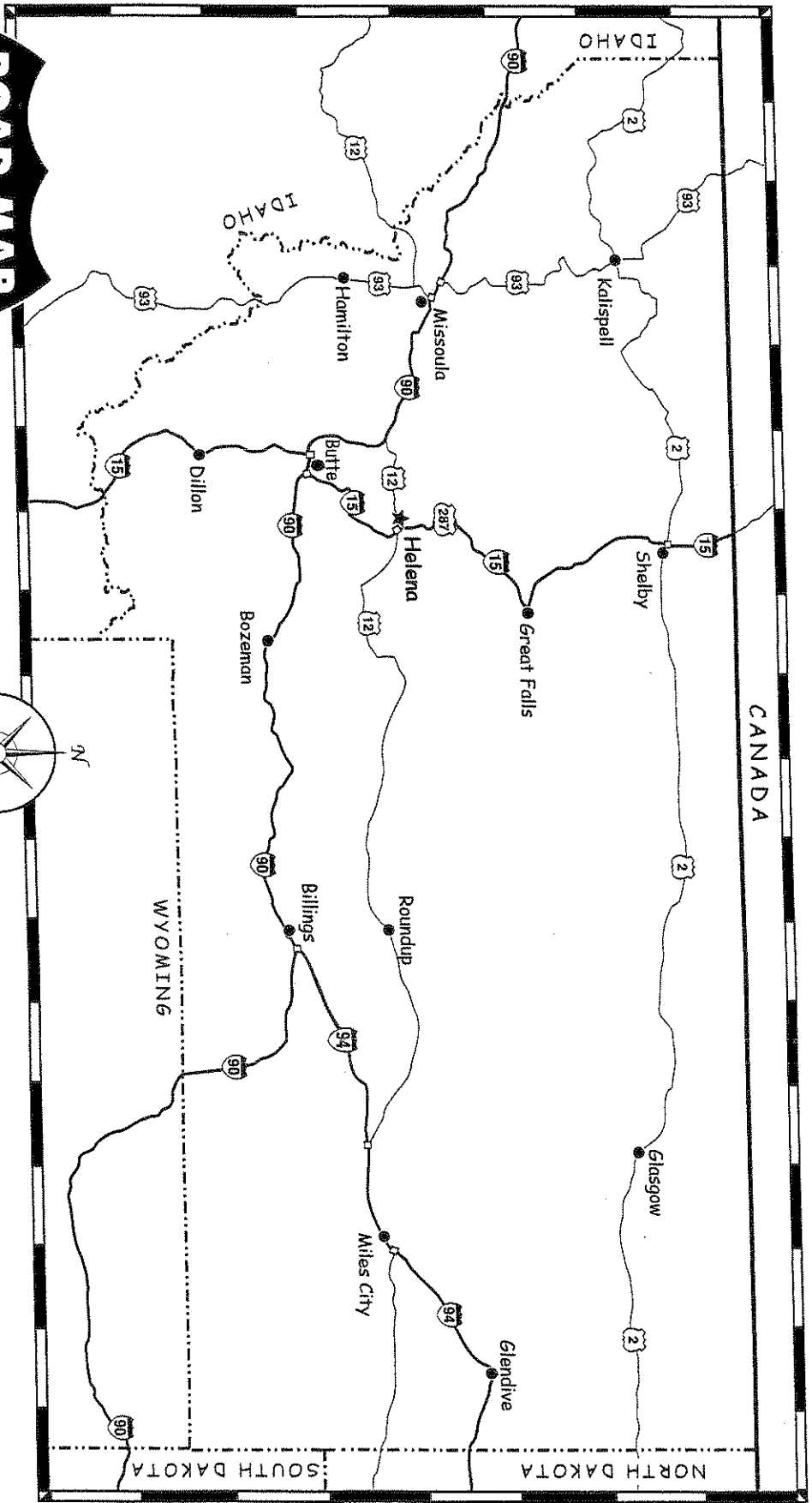
10. Estimate the distance in miles from Billings to Glendive.

11. Use the scale shown on the map and a ruler to estimate the entire distance of U.S. Highway 2 from the western border of the state to the eastern border. Record your answer at the bottom of the map. Be sure to record the distance in both miles and kilometers. Hint: To find kilometers, multiply the number of miles by 1.6. 1 pt

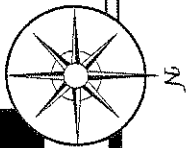
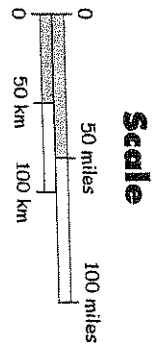
13. Use a green colored pencil to trace the outline of the state of Montana.

14. (Extra Credit) Find the population of any cities in Montana. Write their population next to the cities on the map.

Road Map



ROAD MAP Montana



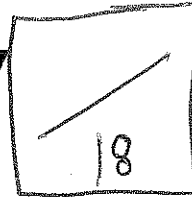
Legend

★	capital	- - - - -	state border	—(90)—	interstate highway
●	city	—	international border	—(20)—	U.S. highway
				□	highway interchange



WEEK 12

The St. Lawrence Seaway



Please do the challenge.
Each location is 1/2 pt.

Monday

1. What is another name for a route by water?

2. The St. Lawrence Seaway is a major waterway that links the Great Lakes with which ocean?

Tuesday

3. The seaway on the map is named for which river?

4. The St. Lawrence Seaway lies between which two countries?

Wednesday

5. Name two port cities on the St. Lawrence River. Are they located in Canada or the United States?

6. Which of the Great Lakes lies entirely in the United States? What is the name of a port city on this lake?



The St. Lawrence Seaway

Thursday

7. What is the name of the westernmost port city on the Great Lakes?

8. Which port city lies between Lake Erie and Lake Huron?

Friday

9. Name the rivers that help to connect the Great Lakes.

10. The Atlantic Ocean and the Great Lakes have different elevations. Which two human-made structures help ships navigate through the seaway?

11.

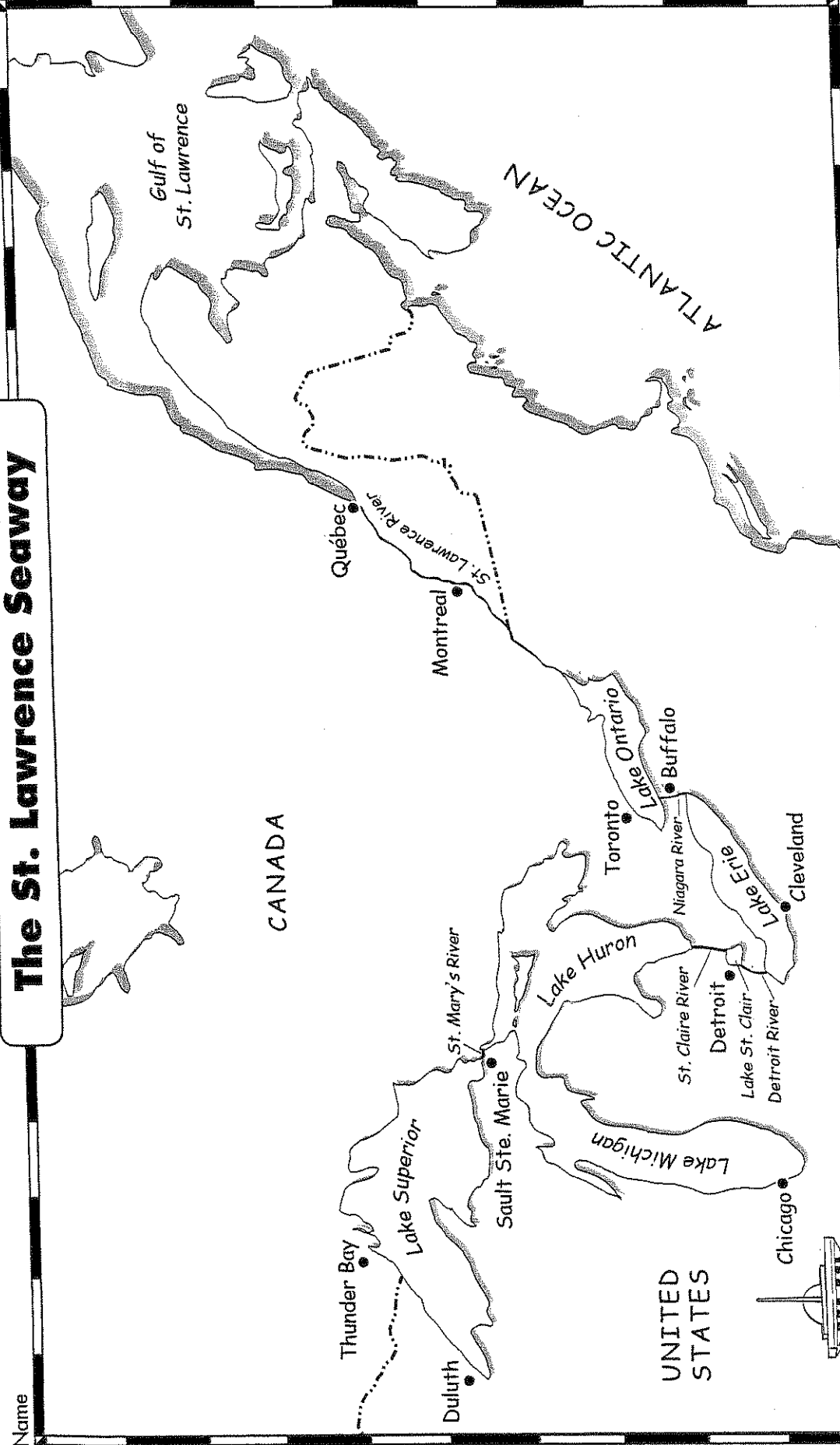
16

Plan a sailing trip from Quebec, Canada, to Duluth, Minnesota. At the bottom of the map, write about the waterways and ports you will travel through on your trip.

- | | | |
|-------------------------------|-----------------------------|-----------------------------|
| 1. Start at <u>Quebec, CA</u> | 8. Across Lake _____ | 16. Across _____ |
| 2. Travel on _____ | 9. Travel on _____ | 17. Visit the city of _____ |
| 3. Visit the city of _____ | 10. Across _____ | 18. Stop at: _____ |
| 4. Across + _____ | 11. Visit the city of _____ | <u>Duluth, U.S.A.</u> |
| 5. Visit the city of _____ | 12. Travel on _____ | |
| 6. Visit the city of _____ | 13. Across _____ | |
| 7. Travel on _____ | 14. Visit the city of _____ | |
| | 15. Travel on _____ | |

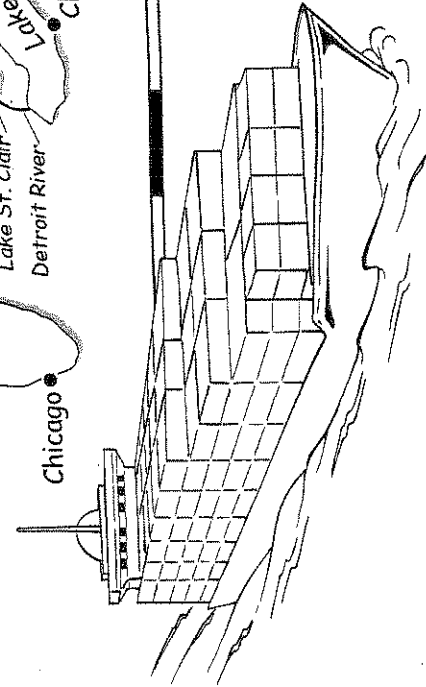
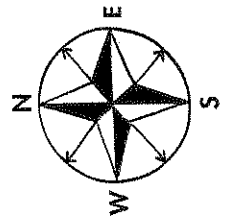
The St. Lawrence Seaway

Name _____



Legend

- port city
- international border





Due

A Physical Map: Washington

Monday

13

1. A physical map shows landforms and waterways. Name four kinds of waterways that are labeled on the map.

2. A mountain range is a chain of mountains. Name a volcanic mountain in the Cascade Range.

Tuesday

3. What is the longest river in Washington?

4. Name a river that flows into the Columbia River.

Wednesday

5. Which volcanic mountain erupted in 1980?

6. Name all states and countries that border Washington.



A Physical Map: Washington

Thursday

7. Do forests cover less than one-fourth, more than one-half, or all of Washington?

8. Which two narrow passages of water flow into the Puget Sound?

Friday

9. Name and describe Washington's highest point. What is the elevation?

10. What is the route a ship traveling from the Pacific Ocean to the port of Seattle would take?

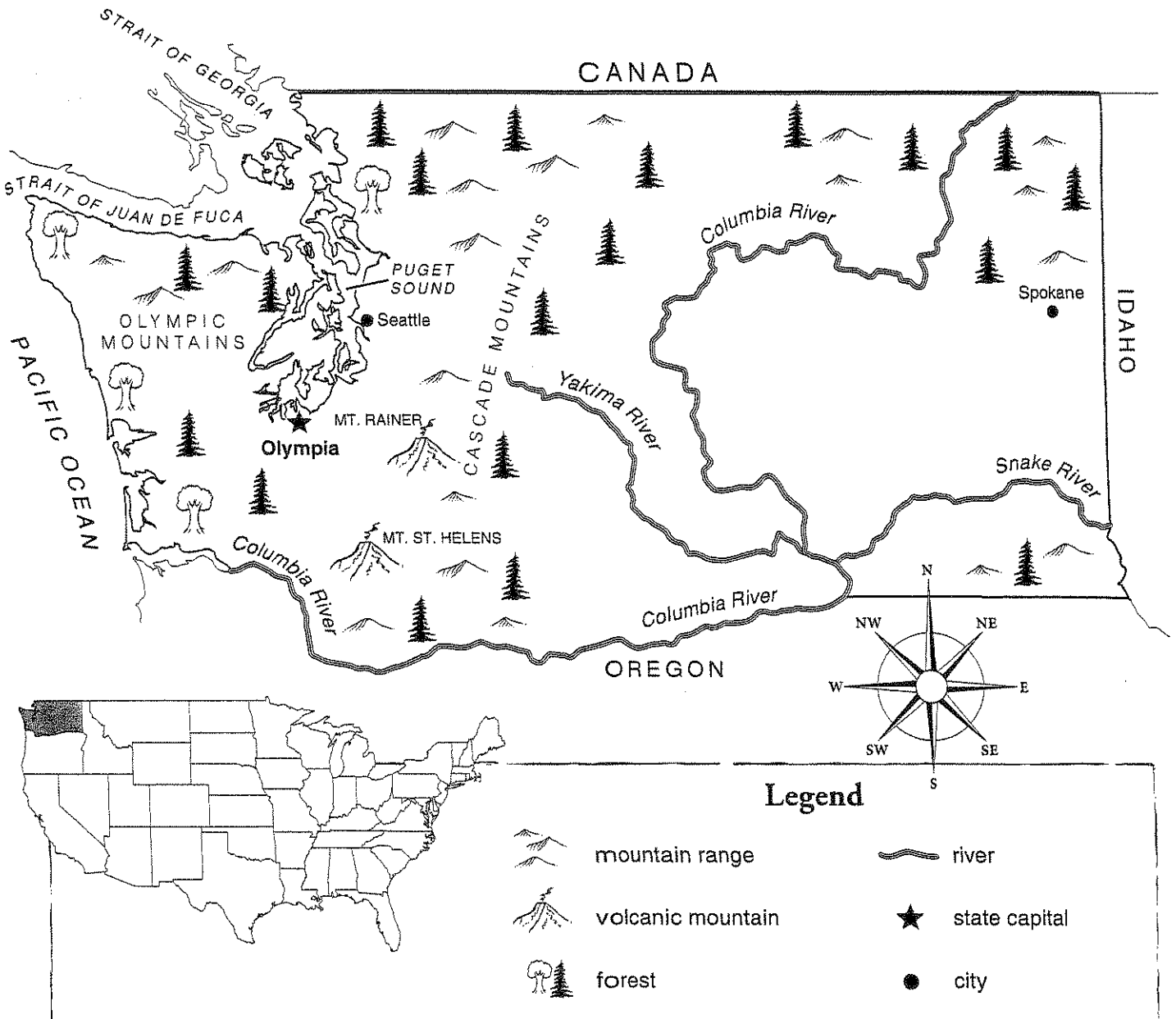
11.

$\frac{1}{3}$

On the map, add the following physical features: Grays Harbor, Willapa Bay, and the San Juan Islands. Use a physical map or atlas to help you.

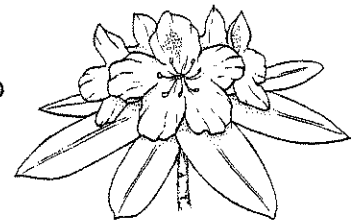
E.C. Color mountains, oceans, and other geographical features.

A Physical Map: Washington



Washington is called “The Evergreen State” because more than one-half of it is covered by forests. Washington is bordered by the Pacific Ocean and has several bays, harbors, straits, and the famous Puget Sound. Ships from all over the world dock at the ports such as Seattle and Olympia on the Puget Sound. Washington has one of the longest rivers in the United States—the Columbia River.

Washington also has two famous volcanic mountains—Mt. Rainer and Mt. St. Helens. Mount Rainer is the highest point in the state. It rises 14,410 feet (4,392 m). It remains an inactive volcano, but Mt. St. Helens is an active volcano and erupted violently in 1980.





Mountains and Deserts of the United States

Due 18

Monday

1. Does the eastern or western half of the United States have more mountain ranges?

2. What are the largest and second largest mountain ranges in the U.S.?

Tuesday

3. Are the Ozarks and the Ouachita Mountains located in the southeastern, south-central, or southwestern part of the U.S.?

4. Which part of the U.S. has the most deserts—the Southeast, the Southwest, or the Northwest?

Wednesday

5. Which mountain ranges make up the Pacific Northwest region of the U.S.?

6. Mount Rushmore, a famous monument, is located in a low mountain range in South Dakota. Name the mountain range.



Mountains and Deserts of the United States

Thursday

7. What is the name of the lowest point in the U.S.? In which desert and in which state is it located?

8. Name the states in which the Great Basin Desert is located.

Friday

9. What is the name of the highest mountain in the United States? What is its elevation?

10. The Chihuahuan Desert is located in which three states?

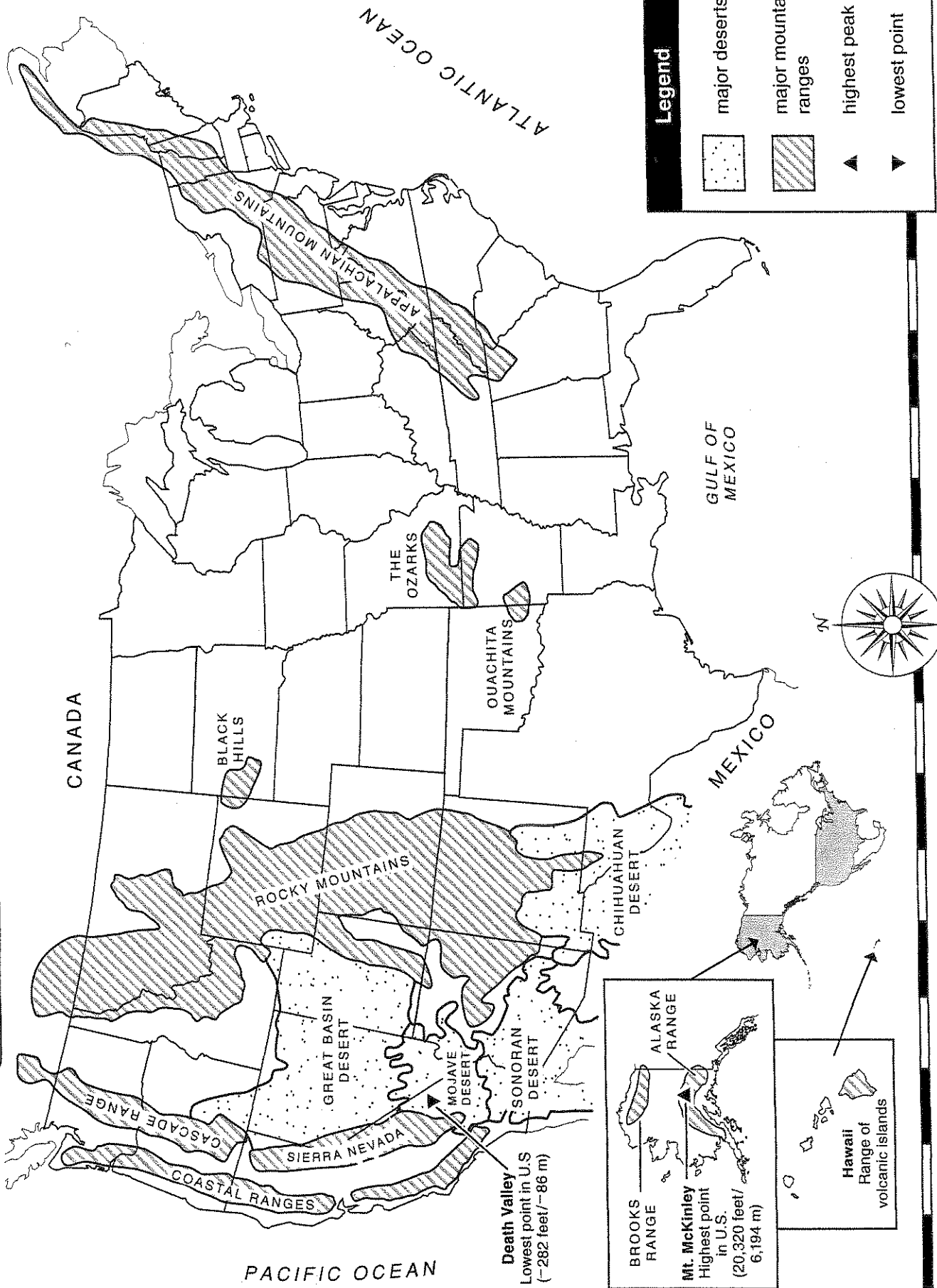
11. /8

On the map, label the eight states that are part of the Rocky Mountains.

E.C. Color the states and create a key. (Each state = 1pt.)

Mountains and Deserts of the United States

Name _____



Death Valley
 Lowest point in U.S.
 (-282 feet / -86 m)

Brooks Range
Alaska Range
Mt. McKinley
 Highest point in U.S.
 (20,320 feet / 6,194 m)

Hawaiian Range of volcanic islands



Waterways of the United States

Monday

Due Friday! /14

1. Which oceans border the United States?

2. How many rivers are labeled on the map?

Tuesday

1. How many labeled rivers flow into the Mississippi River? Name these tributaries.

2. Which lake is the source of the Mississippi River?

Wednesday

1. Name the two gulfs that are labeled on the map. Which one is larger?

2. What is the name of the large lake in Utah?



Waterways of the United States

Thursday

1. How many lakes share a border with Canada and the U.S.? Name them.

2. Which rivers share a border with Canada and the U.S.?

Friday

1. Name the sound and strait that are labeled on the map. Which two states are near them?

2. Which river supplies water to Arizona, California, Colorado, Nevada, and Utah?

4

A bay is an area of the ocean that is partly enclosed by land. A bay is usually smaller than a gulf. Add the following bays to the map: Chesapeake Bay, Delaware Bay, Monterey Bay, and San Francisco Bay. Use a reference physical map or atlas of the United States to help you.

Name _____

WEEK 15

Waterways of the United States

